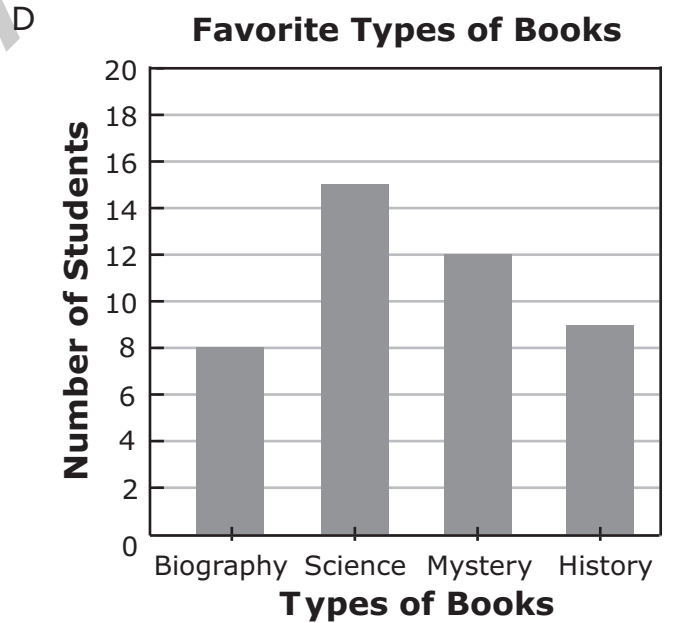
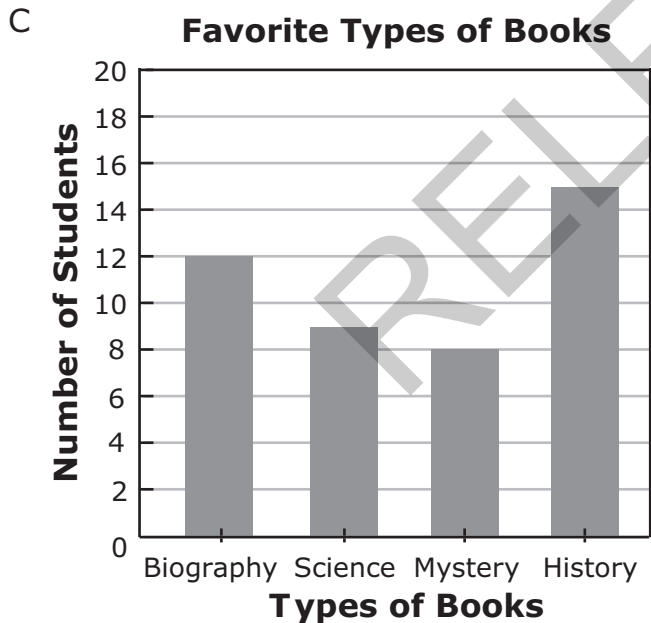
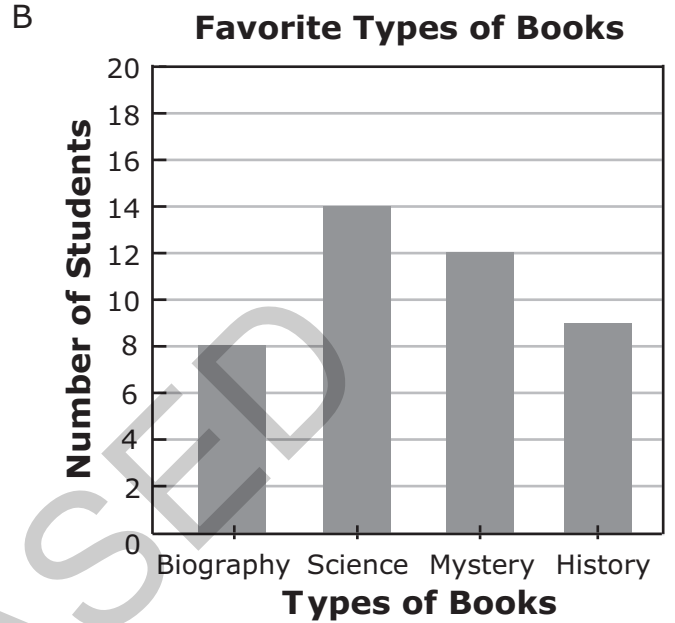
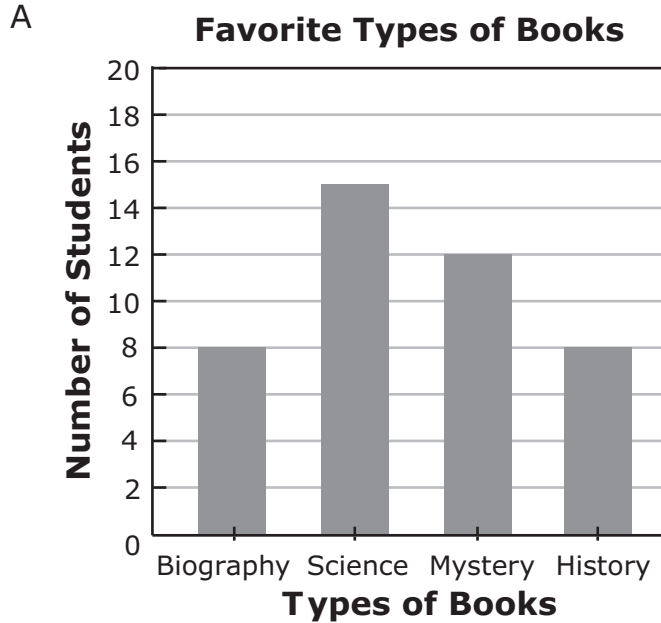

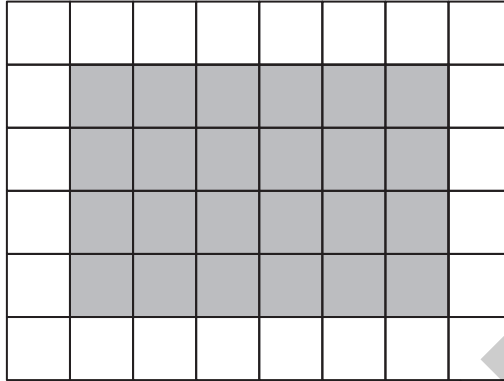


29 Third-graders chose their favorite type of book. Which graph shows that 6 more students chose science than chose history?



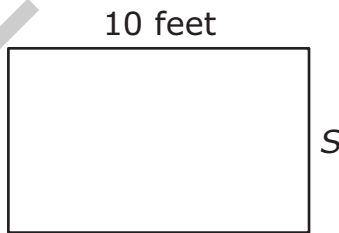


- 30 Kyle found the area of the shaded part of the figure by counting the total number of shaded tiles.



What other way could he have found the area?

- A by multiplying 6 and 4
  - B by multiplying 4 and 4
  - C by adding 6 and 4
  - D by adding 4 and 4
- 31 A rectangular room has a perimeter of 36 feet. One side is 10 feet long.

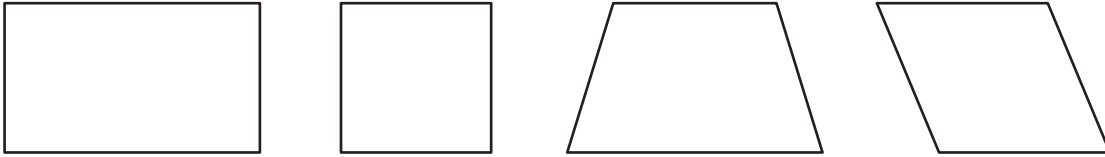


How long is side *S*?

- A 6 feet
- B 8 feet
- C 16 feet
- D 26 feet



32 Four polygons are shown below.



Which statement is true?

- A All four polygons are rhombuses.
  - B All four polygons are squares.
  - C All four polygons are rectangles.
  - D All four polygons are quadrilaterals.
- 33 Pam's grandparents pay Pam to help them each week.
- They pay her \$12 each week to mow their yard.
  - They pay her \$2 each week to wash their dog.

Which expression shows how much Pam's grandparents will pay her in 7 weeks?

- A  $(12 + 7) + (12 \times 2)$
- B  $(2 \times 7) + (12 \times 2)$
- C  $(12 \times 7) + (2 \times 7)$
- D  $(12 + 7) \times (2 + 7)$