


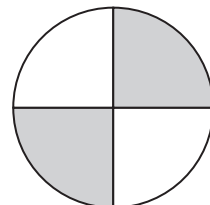
5. Each model equals one whole divided into equal parts. Which models show $\frac{1}{4}$ shaded?

Select the **three** correct answers.


(A)




(B)



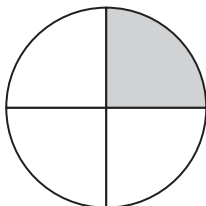
(C)



(D)



(E)



(F)

