

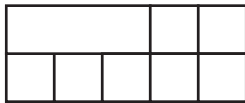
Part B

How many **more** packages did Mr. Conley deliver on Monday and Tuesday than he did on Thursday and Friday?

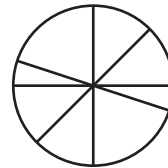
Enter your answer in the box.

- **11.** Sandy draws a shape. She divides it into parts. Each part is $\frac{1}{8}$ the area of the shape. Which shape could be the one Sandy draws?

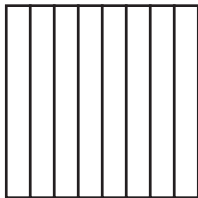
Ⓐ



Ⓑ



Ⓒ



Ⓓ

