

25 Which rule can be used to create the following list of numbers?

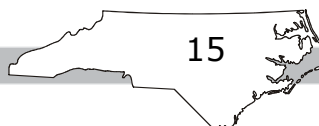
101, 114, 127, 140, 153, 166, 179


- A Add 13.
- B Add 14.
- C Add 78.
- D Add 79.

26 John counted 4 dollar bills and 384 pennies. To the nearest dollar, how much money did John count?

- A \$4
- B \$5
- C \$7
- D \$8

RELEASED



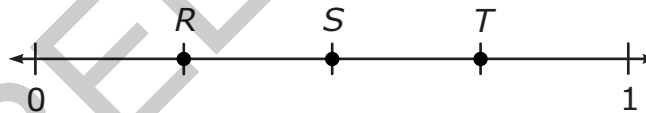


- 27 Jim is planting flowers in the garden shown below. He has already planted flowers in the sections that are shaded.



What fraction of Jim's garden still needs flowers to be planted?

- A $\frac{1}{4}$
 B $\frac{1}{3}$
 C $\frac{2}{3}$
 D $\frac{3}{4}$
- 28 The number line below is divided into equal parts.



What is the distance from R to T on the number line?

- A $\frac{1}{4}$
 B $\frac{1}{3}$
 C $\frac{2}{4}$
 D $\frac{3}{4}$