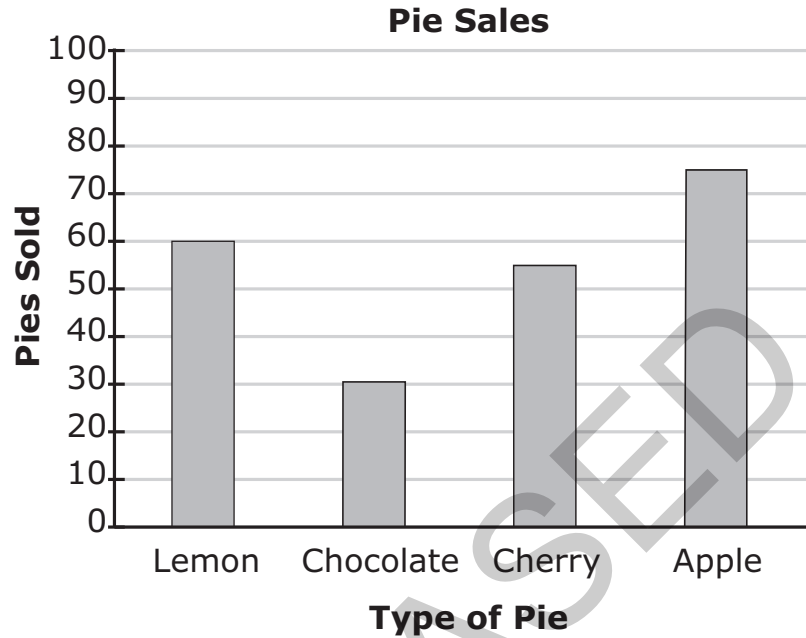



- 38 The graph below shows the number of each type of pie sold at the bakery last month.



How many fewer chocolate pies were sold than apple pies?

- A 40
- B 45
- C 50
- D 55

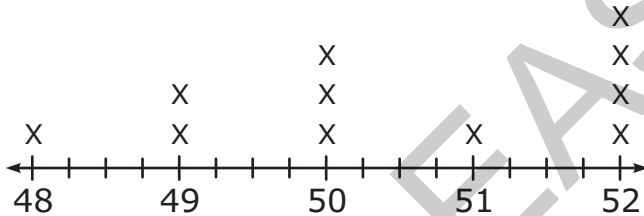


39 Matthew measured the heights of 11 friends. The results are shown in the table below.

Height	Boys
48 in.	Josh
$48\frac{1}{2}$ in.	Adam, Kyle
50 in.	Steven, Alan, Tom
$51\frac{3}{4}$ in.	Andrew
52 in.	Mike, Robert, Jeff, Kevin

Which line plot correctly displays Matthew’s data?

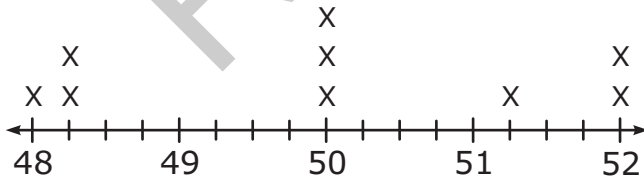
A



B



C



D

